

ARMY PUBLIC SCHOOL JAMMU CANTT

QUESTION BANK – I

CLASS : II

SUB : ENG

Q1. Answer the following questions.

- a) Who was Mowgli ?
- b) Where did Mowgli live?
- c) Who was Mowgli's Friend?
- d) What did the Monkey's want to do?
- e) Did the froggies wear any clothes?
- f) What happened to the froggies when they grew up?
- g) Why were the colours fighting with one another?
- h) How many colours does the rainbow have? List them.
- i) What happens to the colours when it rains?
- j) How did the colours feel in the end?
- k) What did rain say to the colours?

Q2. Circle the common noun and underline the proper noun.

- a) Mowgli was a boy.
- b) Kolkata is a busy city.
- c) Baloo was a bear.
- d) Samrat is an obedient boy.

Q3. Write the names of these people next to the places where they work.

Farmer, doctor, teacher, pilot, baker , shopkeeper

- a) Classroom - _____
- b) Hospital - _____
- c) Airport - _____
- d) Field - _____
- e) Shop - _____
- f) Bakery - _____

Q4. Complete these sentences with a oran.

- a) Have you ever looked after _____ cat?

- b) I have _____ kitten.
- c) This is _____ easy answer.
- d) _____ apple grows on _____ tree.

Q5. Write the many form of the following.

- a) Mountain - _____
- b) Flower - _____
- c) Tomato - _____
- d) Army - _____
- e) Branch - _____

Q6. Circle the correct option.

- a) John is a boy. He / She is at home.
- b) It / We know well.
- c) Ravi, do you / he want to read it.
- d) She / We are brother and sister.
- e) Radhika is kind. He / She gave me a book.

Q7. Circle the adjective.

- a) Sun is shining.
- b) The camel is a useful animal.
- c) Lions are strong animals.
- d) Lalit is a clever boy.

Q8. Complete these words with oi ,oy or ew.

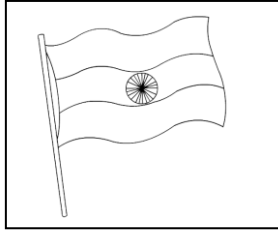
- a) T _ _ shop
- b) N _ _
- c) S _ _ l
- d) J _ _ n
- e) Enj _ _
- f) F _ _

QUESTION BANK – II

CLASS : II

SUB : ENG

Q1. Colour the picture and write four lines on it.



Q2. Complete these sentences by adding 's to the highlighted word.

- a) The old **man** has white hair.
The old _____ hair is white.
- b) The **girl** has a new book.
The _____ book is new.
- c) The **lion** has sharp teeth.
The _____ teeth are sharp.
- d) The **elephant** has a strong trunk.
The _____ trunk is strong.

Q3. Circle the correct option.

- a) There is a big sale / sail this weekend.
- b) Rani promised to mail / male Rohan soon.
- c) Is that a knew / new bag.
- d) I didnot here / hear what you said.

Q4. Add the words to make a new word.

- a) Black + board = _____
- b) Door + mat = _____
- c) Tooth + brush = _____
- d) Class + room = _____

Q5. Fill in the blanks with was / were.

- a) Last night, our dog _____ barking.
- b) Children _____ playing in the park.
- c) It _____ cloudy yesterday.
- d) They _____ singing.

Q6. Make sentences.

- a) National anthem

- b) Elephants
- c) Trunk
- d) National flag

Q7. Unscramble the words.

- a) apraed - _____
- b) naderc - _____
- c) nahtme- _____

Q8. Answer the following questions.

- a) Who doesnot like what the child wants to do ?
- b) Is the child bothered about what his sister says? Which words show his feelings?
- c) How heavy is an elephant baby ?
- d) Name the two continents where elephants live?
- e) With whom did kamala go to the parade?
- f) Which musical instruments did the Army band play?

Sub – Hindi

प्रश्न 1(क (पेड़ पर पांच वाक्य लिखो ।

(ख (डाकिया पर वाक्य लिखो ।

(ग (अपनी मनपसंद सब्जी पर पांच वाक्य लिखो ।

(घ (अपने मनपसंद फल पर पांच वाक्य लिखो ।

(ड (मेरा मित्र पर पांच वाक्य लिखो ।

प्रश्न 2. विलोम शब्द लिखो ।

- (1) छोटी
- (2) मुश्किल
- (3) अंदर
- (4) खाली
- (5) कच्चा

- (6) पतली
- (7) कम
- (8) ऊपर
- (9) अच्छा
- (10) गीला
-)11(कमज़ोर
- (12) अमीर
- (13) साफ़
- (14) सच
- (15) आगे

प्रश्न 3. लिंग बदलो -:

- (1) भाई
- (2) नाना
- (3) शेर
- (4) घोडा
- (5) मोर
- (6) बेटा
- (7) माता
- (8) माली
- (9) राजा
- (10) मौसी

- (11) चाचा
- (12) दादा
- (13) बकरा
- (14) नौकर
- (15) लड़का

प्रश्न 4. वचन बदलो -:

- (1) पौधा
- (2) नदी
- (3) घंटी
- (4) बच्चा
- (5) बकरी
- (6) रास्ता
- (7) रानी
- (8) तितली
- (9) पत्ता
- (10) कविता
- (11) किताब
- (12) आँख
- (13) दवाई
- (14) सब्जी
- (15) लड़का

प्रश्न 5.समानार्थक शब्दों में निशान लगाइए :-

- | | | | | |
|--------------|--------|--------------------------|-----------|--------------------------|
| (1) जमीन - | धरती | <input type="checkbox"/> | गगन | <input type="checkbox"/> |
| (2) आँख - | हवा | <input type="checkbox"/> | नेत्र | <input type="checkbox"/> |
| (3) पानी - | नभ | <input type="checkbox"/> | जल | <input type="checkbox"/> |
| (4) समझदार - | बेबकूफ | <input type="checkbox"/> | बुद्धिमान | <input type="checkbox"/> |
| (5) चोटी - | ऊचाई | <input type="checkbox"/> | बल | <input type="checkbox"/> |
| (6) फूल - | पत्ता | <input type="checkbox"/> | पुष्प | <input type="checkbox"/> |
| (7) पेड़ - | वृक्ष | <input type="checkbox"/> | टहनी | <input type="checkbox"/> |
| (8) तगड़ा - | कमजोर | <input type="checkbox"/> | ताकतवर | <input type="checkbox"/> |
| (9) दुखी - | उदास | <input type="checkbox"/> | हैरान | <input type="checkbox"/> |
| (10) सख्त - | कठोर | <input type="checkbox"/> | शीतल | <input type="checkbox"/> |

प्रश्न 6.प्रश्नों के उत्तर दो :-

- (1) पेड़ोंसे हमें क्या क्या मिलता है?
- (2) माँ ने चुमकी को क्या कम करने को कहा ?
- (3) क्या खाकर हम ताकतवर बन सकते है ?
- (4) समरसिंह ने खुद को क्या क्या बताया ?
- (5) आपके घर तक चिट्ठियां कौन पहुंचाता है ?
- (6) समरसिंह केसा लड़का था ?
- (7) माँ ने तारा की आँखों पर क्या बांधा ?
- (8) डाकिया ने अपने बारे में चुमकी को क्या बताया ?
- (9) हमारी जीभ हमें क्या बताती है ?

)10(बच्चो ने सूखे पौधे के साथ क्या किया ?

प्रश्न .7 कविता की पंक्तियाँ पूरी कीजिए -:

(1) मैं हूँ लम्बा , _____
_____ दुबली ।
मैं मोटा , _____
_____ सुतली ।

)2(रानी घर, _____
_____ पानी ।
नन्हा , _____
_____ बड़ा हुआ ।

)3(सूरज की _____ सीखो,
_____ जगाना ।
लता, _____
सबको _____ ।

प्रश्न .8 वाक्य बनाओ -:

)1(नन्हा

)2(खुशी

)3(चिट्ठी

(4) डाक्टर

)5(दोस्ती

)6(दुबली

)7(डाकिया

)8(कतार

- (9) तगड़ा
)10(माँ
)11(रास्ता
)12(मोटा
)13(कोशिश
)14(मुलायम
)15(दर्द

प्रश्न 9. मिलान करो -:

- | | |
|-----------------------------|-----------|
|)1(चिट्ठी पहुचाने बाला | मांसाहारी |
|)2(डॉक्टर की मदद करने बाला | मोची |
|)3(मांस खाने बाला | डाकिया |
|)4(जूते सिलने बाला | नर्स |
|)5(फल खाने बाला | दर्जी |
|)6(मरीज का इलाज करने बाला | अध्यापक |
|)7(कपड़े सिलने बाला | डॉक्टर |
|)8(स्कूल में पढने वाला | फलाहार |

प्रश्न 10. दी गई मात्रा के दो-दो शब्द लिखो -:

- आकी मात्रा)ा(_____, _____
 ई की मात्रा)ि(_____, _____
 ऊ की मात्रा)ू (_____, _____
 औकी मात्रा)ै(_____, _____

प्रश्न 9 दिए गए वाक्यों में संज्ञा शब्दों को रेखांकित कीजिए-

- 1 हमें फल भी खाना चाहिए ।
- 2 मधुरिमा दुखी होकर आई ।
- 3 मोहन खुश हुआ ।

- 4 कछुआ धीरे चलता है ।
5 सनी मूँह बनाकर बैठ गया ।

प्रश्न 10 सही शब्दों पर गोला लगाओ ।

1. डॉक्टर	डाक्टर	डाकटर
2. पौदा	पौधा	पोधा
3. ज्यादा	ज्यादा	ज़्यादा
4. बूतकर	कबूतर	कबोतर
5. चुमकी	चुकमी	कुचमी
6. तगड़ा	तगरा	तगढ़या
7. मुश्किल	मुशकिल	मुश्कील
8. दकिया	डाकिय	डाकिया

CLASS: II

SUB: MATHS

CHAPTER - 1

1. Fill the boxes with >, < or =

- a) 22 22 b) 88 77 c) 42 37
d) 67 84 e) 50 50

2. Write the following numbers in words:

- a) 27 b) 68 c) 100 d) 18 e) 90

3. Circle the biggest number:

- a) 23 , 56 , 49 , 30 b) 46 , 71, 99, 35
c) 74, 65, 53, 84 d) 57, 77, 92, 18

4. Write the following in numbers:

- a) seventy – five b) eighty c) fourteen d) nine

CHAPTER- 2

1. Addition of two digit :

- a) $\begin{array}{r} 23 \\ + 66 \\ \hline \end{array}$ b) $\begin{array}{r} 65 \\ + 11 \\ \hline \end{array}$ c) $\begin{array}{r} 74 \\ + 24 \\ \hline \end{array}$ d) $\begin{array}{r} 33 \\ + 51 \\ \hline \end{array}$

2. Fill in the blanks :

- a) $14 + 22 = \underline{\quad}$ b) $22 + 33 = \underline{\quad}$ c) $32 + 12 = \underline{\quad}$
d) $60 + 10 = \underline{\quad}$ e) $53 + 41 = \underline{\quad}$



3. Subtraction of two digit :

- b) $\begin{array}{r} 27 \\ - 16 \\ \hline \end{array}$ b) $\begin{array}{r} 85 \\ - 41 \\ \hline \end{array}$ c) $\begin{array}{r} 74 \\ - 24 \\ \hline \end{array}$ d) $\begin{array}{r} 33 \\ - 51 \\ \hline \end{array}$

4. Fill in the blanks :

- b) $40 - 20 = \underline{\quad}$ b) $26 - 13 = \underline{\quad}$ c) $32 - 10 = \underline{\quad}$
d) $62 - 11 = \underline{\quad}$ e) $53 - 41 = \underline{\quad}$

5. Colour the shapes and match.

- a)  1
b)  4

CHAPTER 3

1. Write the numbers that comes after :

- a) 118 b) 177 c) 199 d) 130

2. Write the numbers that comes before :

- b) 200 b) 145 c) 195 d) 106

3. Circle the even numbers.

- a) 3, 5, 2, 6 b) 4, 7, 10, 1

4. Circle the odd numbers.

- b) 3, 4, 9, 6 b) 4, 5, 10, 1

5. Fill in the blanks:

- a) The first month of the year is .
b) Saturday is the day of the week.
c) $100 + 40 + 5$ is .

6. Write the increasing order of the following.

- 133 143 123
126 116 156

7. Write the decreasing order:

- 45 60 50
110 101 120

CHAPTER – 4

1. Adding of three numbers :

a) 2 3	b) 6 5	c) 3 4	d) 2 3
6 4	1 1	2 1	5 1
+ 1 2	+ 0 2	+ 2 3	+ 1 6
<input type="text"/>	<input type="text"/>	<input type="text"/>	<input type="text"/>

2. Add the following:

a) 4 3	b) 7 5	c) 3 4	d) 2 6
+ 1 9	+ 0 5	+ 2 8	+ 5 6
<input type="text"/>	<input type="text"/>	<input type="text"/>	<input type="text"/>

- 3. A shopkeeper sold 24 books of Maths and 48 books of English. How many books did he sell in all?**
- 4. Karuna has 24 pens, Pooja has 42 pens and Riya has 16 pens. How many pens do they have altogether?**

CHAPTER – 5

1. Subtract the following:

a) 9 9	b) 7 5	c) 9 4	d) 8 9
-6 9	-4 3	-5 8	-5 6
<input type="text"/>	<input type="text"/>	<input type="text"/>	<input type="text"/>

2. Subtract the following:

a) 8 4	b) 9 5	c) 7 0	d) 8 2
-4 9	-4 7	-3 8	-7 6
<input type="text"/>	<input type="text"/>	<input type="text"/>	<input type="text"/>

- 3. Rahul had 53 books and Rinku had 62 books. How many more books did Rinku have?**
- 4. Choose the correct option:**


- $9 - 5 = \underline{\quad}$
a) 3 b) 0 c) 4
- $7 - 1 = \underline{\quad}$
a) 6 b) 7 c) 8

CHAPTER – 8

- 1. Which unit (m or cm.) will you use to measure the following:**


- a) The length of a car = _____
- b) The length of a spoon = _____
- c) The length of a sharpener = _____
- d) The length of a wall = _____

2. Colour the objects and circle the weight that seems to be correct:



i) 1kg

ii) 50kg



a)

i) 20 kg

ii) 20 g

3. Which unit (g or kg.) will you use to measure the following:

- a) A bus - _____
- b) A mirror - _____
- c) A bag filled with books - _____
- d) An ice-cream- _____

4. Circle the objects with greater capacity.

- Pen b) bucket c) pencil box d) jug

SET -1

CLASS:II

SUBJECT:EVS

Q1.Fill in the blanks with the help the box from the box.

Igloos, Caravans, Tailor, Clothes, Onam, Mahatma Gandhiji
 Season,silkworm, farmers, clothes, 25 December,26 January

- a) _____ stitches our clothes.
- b) We wear _____ to cover our body.
- c) _____ are the houses on the wheels.
- d) Houses made of ice blocks are called _____.

- e) The Father of our Nation is _____.
- f) _____ is the harvest festival of Kerala.
- g) We wear different clothes depending on _____.
- h) We get silk from _____.
- l) _____ designs our house.
- j) _____ protect us from heat, light and rain.
- k) We celebrate Christmas Day on _____.
- l) We celebrate Republic Day on _____.
- m) _____ grow cotton plants.

Q2. Write (T) for true and (F) FOR false.

- a) In villages people mostly live in pucca houses ()
- b) Plumber fits electrical points. ()
- c) On Christmas Day people go to the Church ()
- d) On Diwali people worship Goddess Lakshmi ()
- e) We celebrate Independence Day on 26 January ()
- f) In cities people mostly live in kutcha houses ()
- g) On Gurupurav people go to the Church ()
- h) On the day of Id people visit mosque ()
- i) We celebrate Republic Day on 15 August. ()
- j) Onam is the harvest festival of Assam ()
- k) Diwali is the festival of colours. ()
- l) Gandhi Jayanti is a National Festival. ()

Q3. Put the letters in correct order to get the answer (1X6=6)

- a) The shepherd rears sheep for _____ (loow)
- b) The _____ makes the drawing of the House (tectchiar)
- c) We get silk from _____ (lksirmro)
- d) The festival of light is called _____ (wadiil)
- e) Birthday of tenth sikh gurus _____ (puravrugu)
- f) Gandhiji wove clothes on _____ (khachar)

- e) Onam is the famous festival of _____
 Kerala Rajasthan
- f) kutcha house is made up of _____
 Bricks and cement mud and wood
- f) Jesus Christ was born on this day _____
 15 August 25 December
- h) In Kerala and Kashmir people also live in _____
 Igloos houseboats
- i) On Eid people visit _____ to pray God.
 Temple mosque
- j) _____ is our Father of Nation.
 Mahatma Gandhiji Narender Modi
- k) On Diwali people celebrate _____.
 Goddess Lakshmi Jesus Christ
- l) _____ lays bricks and cement.
 Plumber Mason

Q6. Complete the missing letters.

T_IL_R

H_A_T

V_G_TA_LES

GUR_DW_RA

C_TT_N

FA_I_Y

CHR_STM_S

SI_KWO_RM

PL_MB_R

P_C_AHO_SE

P A _ N T _ R

B _ A _ N

M _ S _ N

NU _ LE _ R FA _ ILY

CL _ T _ ES

V _ GA _ S

BI _ THD _ Y

RA _ IN CO _ T

REP _ BL _ C DAY

CA _ AV _ N

Q7. Draw and colour the pictures.


a) Kutcha House



b) Summer Dress



c) Christmas tree




d) Body building Food



e) External Organ



f) House Boat



g) Winter clothes



h) Diya or Candle



i) Protective Food



e) Internal Organ



Q8.Name the following :

a) Name any two national festivals.

Ans: _____

b) Name any two seasons.

Ans: _____

c) Name two people who help us to build houses.

Ans: _____

d) Name two people who help to make clothes.

Ans: _____

e)Name two cloth materials.

Ans: _____

f) Name any two religious festivals.

Ans: _____

g) Name any two types of houses.

Ans: _____

h) Name two special days.

Ans: _____

i) Name two types of roofs.

Ans: _____

j) Name two animals which gives us wool.

Ans: _____

Q9. Answer the following questions.

a) Why we wear clothes ?

b) What does the tailor do?

c) What are kutchra houses?

d) When and why we celebrate Christmas Day?

e) When do we celebrate our Independence Day?

f) What are caravans?

g) Where do we get the cotton from?

h) Why do we build houses?

i) Why is Diwali called a 'festival of light'?

j) When do we celebrate our Republic Day

k) Why we celebrate Guruparabs?

l) Name three National Festivals.

m) What are pucca houses?

n) What are some special days?

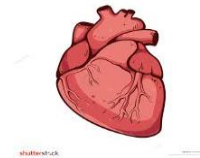
o) When we celebrate Gandhi Jayanti?

Q.10 Match the picture with the name.

a) Heart



b) Nuclear Family



c) Non vegetarian food



d) cotton clothes



e) Independence Day



f) Brain



g) Joint Family



h) Woollen Clothes




i) Pucca House



j) Diwali



k) Vegetarian Food



QUESTION BANK –SET 2

CLASS:II

SUBJECT:-EVS

Q1.Fill in the blanks with the help the box from the box

Plants and animals, hair, tongue, 21 yrs, Heart, big family

- a) We become adult at the age of _____.
- b) _____ pumps and supply blood to the whole body.
- c) Non vegetarian eat both _____.
- d) A joint family is also called a _____.
- e) An organ that helps us to taste is _____.
- f) The colour of our _____ changes as we grow older .

Q2. Write (T) for true and (F) for false.


- a) When we swallow the food it goes to lungs ()
- b) When we are born we are babies. ()
- c) Hands and feet are external organs. ()
- d) We have ten sense organs. ()
- e) The last name or the family name is called" Surname". ()

Q3. Put the letters in correct order to get the answer


- a) We smell with our _____ . (osne)
- b) _____ help us to think. (rinba)
- c) At the age of 13 yrs we become _____ .(gerteenas)

Q7. Draw and colour the pictures.

g) Your family tree




h) Two protective foods




c) Two external organs



d) Two energy giving foods



e)Two sense organs



Q8.Name the following :-

a) Name any two family members.

Ans: _____

b) Name any two vegetarian foods .

Ans: _____

c) Name two external organs.

Ans: _____

d) Name two internal organs.

Ans: _____

e) Name two junk foods.

Ans: _____

Q9.Answer the following questions.

a) What is a joint family?

b) What is a balanced meal?

c) Why it is important to drink water?

d) Name five sense organs and their functions?

e) What do vegans eat?

SUBJECT: COMPUTER

CHAPTER 1(PARTS OF A COMPUTER)

Q1. Fill in the blanks with appropriate words:

Keyboard cabinet printer

- a. A _____ has many keys.
- b. A _____ helps us to get printouts.
- c. _____ contains the CPU.

CHAPTER 2(USES OF COMPUTERS)

Q1. Fill in the blanks with appropriate words:

Games sums music movies

- a. A Computer can be used to play _____.
- b. A Computer is very good at solving _____.
- c. We can listen to _____ on a computer.
- d. We can watch _____ on a computer.

Q2. State whether the following statements are true (T) or false (F).

- a. A Computer has only one use.
- b. We can play many games on a computer.
- c. We can draw pictures with the help of a computer.
- d. A computer cannot solve sums.
- e. We cannot listen to music on a computer.

Q3. Answer the following questions:

- a. Which part of the computer do we use to draw pictures?
- b. Does a computer make mistakes while solving sums?